

D.A.V. PUBLIC SCHOOL, ECL, JHANJRA AREA
SESSION: 2024-2025
CLASS: V SUBJECT: ENGLISH
HOLIDAY HOMEWORK

1. Identify the sound which is used to express pain or suffering.
i) Groaning. ii) Whispering.
iii) Murmuring. iv) Buzzing.
2. Choose the correct answer from the given options to complete the statement below:
The dental instruments that aunt poly used were-
i) A silk thread and a chunk of ice.
ii) A cotton thread and a chunk of coal.
iii) A silk thread and a chunk of fire.
iv) A cotton thread and a chunk of fire.
3. Fill in the blank with the correct answer.
Aunt Polly tells _____ to get her a silk thread.
4. What did Tom use to think of Monday mornings?
5. Which of the following characteristics best suits with Tom?
i) calm ii) naughty
iii) kind iv) responsible
6. State whether the following statement is true or false.
Tom had a severe pain in his sore toe.
7. 'Old lady sank down in a chair with a relief'. Why did she feel relieved?
i) Tom had a sore toe ii) Tom was not terribly sick

iii) Tom's behaviour was outrageous iv) Tom's tooth was loose
8. Select the suitable meaning for " makes my flesh crawl".

i) feeling of exuberating ii) dampness of being overwhelmed

iii) being in a state of aghast iv) heavenly state of mind
9. Fill the given blanks.
Tom's one of the upper front _____ was _____.

i) tooth, loose ii) teeth, lose

iii) teeth, loose iv) tooth, lose
10. Why didn't Tom want to mention about his loose tooth?

i) Aunt Polly would take him to the doctor
ii) Aunt Polly would give him medicine
iii) Aunt Polly would pull it out
iv) Aunt Polly would not let him go to fishing
11. Assertion: Tom felt foolish for his act.

Reasoning: He was caught by his Aunt poly.
i) Both A and R are true and R is the correct explanation of A.
ii) Both A and R are true but R is not the correct explanation of A.

- iii) A is true but R is false.
- iv) A is false but R is true

12. Assertion: Tom remembered hearing the doctor describe about an illness.

Reasoning: Tom started groaning louder and louder.

- i) Both A and R are true and R is the correct explanation of A.
- ii) Both A and R are true but R is not the correct explanation of A.
- iii) A is true but R is false.
- iv) A is false but R is true

13. Select the correct option to complete the sentence given below.

Swaminathan felt embarrassed to see his name on the board and slapped Pea fiercely without a word. This shows that he was _____.

- i) loud
- ii) meek
- iii) scared
- iv) impolite

14. Identify the correct meaning of the idiomatic expression 'scratch his chin'.

- i) To think seriously.
- ii) To think proactively.
- iii) To think creatively.
- iv) To think randomly.

15. What does the phrase 'face turned red' mean in the story 'The Tale of a Tail'?

- i) to be angry
- ii) to be shy
- iii) to be confused
- iv) to be nervous

16. Assertion: Swaminathan got angry when he entered V-grade classroom.

Reasoning: Someone wrote the word 'Tail' on the blackboard.

- i) Both A and R are true and R is the correct explanation of A.
- ii) Both A and R are true but R is not the correct explanation of A.
- iii) A is true but R is false.
- iv) A is false but R is true

17. Assertion: Swaminathan, Shankar and Pea could hardly believe their eyes that Somu and Mani are fighting.

Reasoning: Mani and Rajam were best friends.

- i) Both A and R are true and R is the correct explanation of A.
- ii) Both A and R are true but R is not the correct explanation of A.
- iii) A is true but R is false.
- iv) A is false but R is true

18. State whether the following statement is true or false.

Swaminathan got angry because everyone was giggling in the classroom.

19. State whether the following statement is true or false.

Swaminathan thought Shankar or Pea had written the word 'Tail' on the blackboard.

20. "What's wrong with you, little rogues?"- The rogues are-

- i) Swaminathan, Pea and Shankar.
- ii) Swaminathan, Pea and Mani.
- iii) Swaminathan, Rajam and Shankar.
- iv) Swaminathan, Somu and Pea

DAV PUBLIC SCHOOL, ECL, JHANJRA AREA
SESSION: 2024-25
CLASS: V SUBJECT: HINDI
HOLIDAY HOMEWORK

1. निम्नलिखित खाली स्थानों की पूर्ति उचित विकल्प चुनकर कीजिए -

क) शाह का समस्या बनकर आया।

अ) होजा ब) दरबारी स) दूत द) चूज़ा

ख) शाह के सलाहकार को कहते हैं।

अ) दूत ब) सेना स) जनता द) वज़ीर

ग) वल्लभ भाई पटेल ने 1897 में की परीक्षा उत्तीर्ण की।

अ) वकालत ब) दसवीं स) बी. ए. द) एम. ए.

घ) वल्लभ भाई पटेल से प्रभावित होकर स्वतंत्रता संग्राम में कूद पड़े।

अ) गाँधी जी ब) विठ्ठल स) पिता द) माता

2. निम्नलिखित कथनों को पढ़कर सही के सामने (v) एवं गलत के सामने (x) का निशान लगाइए -

क) पड़ोसी सुलतान के दूत ने अपने साथ चूज़ा लाया।

ख) चूज़ा चावल के दाने चुगने लगा।

ग) होजा काम करने में मशगूल रहता था।

घ) शाह होजा से प्रसन्न होकर उसे अपना दूत बनाना चाहता था।

ङ) पड़ोसी सुलतान का दूत बगदाद के सुलतान के दरबार में आया।

च) दूत दुम दबाकर भागने वालों में से नहीं था।

छ) वल्लभ ने दसवीं तक आते-आते निर्णय ले लिया था कि आगे पढ़ाई नहीं करनी है।

ज) वल्लभ ने स्वयं विदेश जाने के लिए अपने बड़े भाई विठ्ठल को मना लिया।

झ) गाँधी जी ने वल्लभ भाई को 'सरदार' की उपाधि दी।

ज) 1942 ई. में 'अंग्रेज़ों भारत छोड़ो' का नारा देश के कोने-कोने में गूँजने लगा।

ट) स्वतंत्रता प्राप्ति के पश्चात् भारत में रियासतों की संख्या 462 थी।

ठ) वल्लभ भाई ने अपनी दृढ़ता से सभी रियासतों को कुचल डाला।

3. निम्नलिखित कथनों को पढ़कर सही विकल्प छाँटकर लिखिए -

क) **कथन** - पड़ोसी सुलतान के दूत ने लकीर खींचकर कुछ बताना चाहा।

कारण - दूत अपने राजा का संदेश दूसरे राजा तक पहुँचाता है।

I) कथन और कारण दोनों सही हैं क्योंकि कारण कथन की सही व्याख्या करता है।

II) कथन और कारण दोनों सही हैं परंतु कारण कथन की सही व्याख्या नहीं करता है।

III) कथन सही, परंतु कारण गलत है।

IV) कथन गलत है, परंतु कारण सही है।

ख) **कथन** - चावल चुगने के लिए होजा ने चूज़ा छोड़ दिया।

कारण - चावल चुगने के लिए चूज़ा छोड़ने का मतलब है - तुम अभी बच्चे हो।

I) कथन और कारण दोनों सही हैं क्योंकि कारण कथन की सही व्याख्या करता है।

II) कथन और कारण दोनों सही हैं परंतु कारण कथन की सही व्याख्या नहीं करता है।

III) कथन सही, परंतु कारण गलत है।

IV) कथन गलत है, परंतु कारण सही है।

ग) **कथन** - होजा ने बादशाह के प्रस्ताव को ठुकरा दिया।

कारण - वह काम करने में मशगूल रहता था।

I) कथन और कारण दोनों सही हैं क्योंकि कारण कथन की सही व्याख्या करता है।

II) कथन और कारण दोनों सही हैं परंतु कारण कथन की सही व्याख्या नहीं करता है।

III) कथन सही, परंतु कारण गलत है।

IV) कथन गलत है, परंतु कारण सही है।

क) **कथन** - सरदार वल्लभ भाई को देश 'लौह पुरुष' के नाम से याद करता है।

कारण - उन्होंने दृढ़तापूर्वक अपनी बात पिता के सामने रखा।

I) कथन और कारण दोनों सही हैं क्योंकि कारण कथन की सही व्याख्या करता है।

II) कथन और कारण दोनों सही हैं परंतु कारण कथन की सही व्याख्या नहीं करता है।

III) कथन सही, परंतु कारण गलत है।

IV) कथन गलत है, परंतु कारण सही है।

DAV PUBLIC SCHOOL , ECL, JHANJRA AREA
SESSION: 2024-2025
SUBJECT: BENGALI CLASS-V
HOLIDAY HOMEWORK

১) নিম্নলিখিত প্রশ্নগুলির সঠিক বিকল্পটি নির্বাচন করে লেখো।

(A.মত্তব্য ও যুক্তি উভয়েই সঠিক B.মত্তব্য সঠিক কিন্তু যুক্তি ভুল C.মত্তব্য ও যুক্তি সঠিক হলেও যুক্তি মত্তব্যের অনুসারী নয়
D.মত্তব্য ভুল কিন্তু যুক্তি ঠিক)

ক) মত্তব্য- রাজা ও মন্ত্রীর ভবলীলা শেষ হয়ে গেল।

যুক্তি- তারা পথিকদের কথায় নিজেদের বোকামির জন্য মেনে নেয়।

খ) মত্তব্য- দুজন পথিক চুলা কাটছিল।

যুক্তি- তাদের চুরি করার ইচ্ছে ছিল।

গ) মত্তব্য- মত্তব্য- মেয়েরা জগৎ পারাবারের তীরে খেলে।

যুক্তি- তারা মাটি দিয়ে ঘর বাঁধতে পছন্দ করে।

ঘ) মত্তব্য- রবীন্দ্রনাথ ঠাকুর 'শিশু' কবিতায় ছেলেদের খেলার কথা বলেছেন।

যুক্তি- কবিতায় 'ছেলে' অর্থে 'শিশু' অর্থাৎ ছেলে ও মেয়ে উভয়কে বোঝানো হয়েছে।

২) নিম্নলিখিত বাক্যগুলির সত্য মিথ্যা যাচাই করো।

ক) রাজা ভবচন্দ্র খুব দক্ষ ও বুদ্ধিমান রাজা ছিলেন।

খ) দুইজন পথিক সত্যি সত্যি জ্যোতিষশাস্ত্রে দক্ষ ছিল।

গ) জগৎ-পারাবারের তীরে মেয়েরা করে খেলা।

ঘ) ছেলেরা কাগজ দিয়ে নৌকা বানায়।

৩) নিম্নলিখিত বিবৃতির সঠিক বিকল্পটি নির্বাচন করো।

a) কারণ ১ ও কারণ ২ ভুল b) কারণ ১ ও কারণ ২ সঠিক

c) কারণ ১ সঠিক কিন্তু কারণ ২ ভুল d) কারণ ১ ভুল কিন্তু কারণ ২ সঠিক

ক) বিবৃতি- দুজন পথিক একে অপরকে ঠেলতে শুরু করল।

কারণ ১- তার বুঝেছিল যে রাজা ও তার মন্ত্রী বোকা।

কারণ ২- প্রাণে বাঁচার জন্য তারা একে অপরকে ঠেলার কথা ভেবেছিল।

খ) বিবৃতি- রাজা তার মন্ত্রীকে সিঁদুক থেকে বের করেছিলেন।

কারণ ১- নগরে একটা বাঘ এসেছিল।

কারণ ২- রাজা নিজে ভয় পেয়েছিলেন বলে।

৪) নিম্নলিখিত প্রশ্নগুলির সঠিক উত্তরটি নির্বাচন করো।

ক) তিনি নাক-কানের _____ খুলিয়াই সব দেখতে পেলেন।

a. টিপলে b. কাপড় c. বন্ধন d. তুলো

খ) আর একদিন দুইজন পথিক এসে _____ পুষ্করিণীতীরে উপস্থিত হইল।

a. অপরাহ্নে b. সায়াহ্নে c. পূর্বাহ্নে d. মধ্যাহ্নে

গ) _____ দুইজনকে গ্রেপ্তার করিয়া লইয়া গেল।

a. সেনারা b. দ্বারপাল c. রক্ষীগণ d. পুলিশ

ঘ) 'টিকটিক' একটি _____ উদাহরণ।

a. বিশেষ্য b. বিশেষণ c. ক্রিয়া d. অব্যয়

ঙ) লাল বল।—এই বাক্যে 'লাল' একটি _____ পদ।

a. বিশেষ্য b. বিশেষণ c. ক্রিয়া d. অব্যয়

চ) তুমি বইটি নাও। এই বাক্যে 'বই' একটি _____ পদ।

a. বিশেষ্য b. বিশেষণ c. ক্রিয়া d. অব্যয়

ছ) দুই শব্দের মিল দেখিয়ে সঠিক উত্তরটি নির্বাচন করে লেখো।

| শব্দ-১ | শব্দ-২ |
|-----------|------------|
| ক) বিড়াল | ১. অব্যয় |
| খ) ঘুমানো | ২. বিশেষ্য |
| গ) রূপরূপ | ৩. সর্বনাম |
| ঘ) তুমি | ৪. ক্রিয়া |

a. ক-২, খ-৪, গ-১, ঘ-৩ b. ক-৩, খ-৪, গ-২, ঘ-১

c. ক-১, খ-২, গ-৩, ঘ-৪ d. ক-২, খ-৪, গ-৩, ঘ-১

জ) দুই শব্দের মিল দেখাও।

| ক-শব্দ | খ-শব্দ |
|---------|--------------------|
| ক) হাঁস | ১. বিশেষণ (_____) |
| খ) খেলা | ২. অব্যয় (_____) |
| গ) এবং | ৩. বিশেষ্য (_____) |
| ঘ) ভালো | ৪. ক্রিয়া (_____) |

a. ক-২, খ-৪, গ-১, ঘ-৩ b. ক-৩, খ-৪, গ-২, ঘ-১

c. ক-১, খ-২, গ-৩, ঘ-৪ d. ক-২, খ-৪, গ-৩, ঘ-১

ঝ) 'সিংহ' কী জাতীয় বিশেষ্যের উদাহরণ?

a. বিশেষ্য b. বিশেষণ c. ক্রিয়া d. অব্যয়

ঞ) 'রেলগাড়ি' পদের কোন প্রকারের মধ্যে পড়বে?

a. বিশেষ্য b. বিশেষণ c. ক্রিয়া d. অব্যয়

DAV PUBLIC SCHOOL, ECL, JHANJRA AREA

SESSION: 2024-2025

CLASS: V SUBJECT: SANSKRIT
HOLIDAY HOMEWORK

1. अधोलिखित-प्रश्नानाम् उचित-उत्तरं चयनं कुरुत।

क) का मधुरा अस्ति?

- a) प्रभातवेला b) मध्याह्नवेला c) सायंवेला d) रात्रिवेला

ख) आकाशे कः उदितः?

- a) चन्द्रः b) सूर्यः c) नक्षत्रम् d) प्रकाशः

ग) कः अपगतः?

- a) प्रकाशः b) अन्धकारः c) सूर्यः d) चन्द्रः

घ) के आकाशे अत्र-तत्र भ्रमन्ति?

- a) वानराः b) खगाः c) जनाः d) बालाः

ङ) वृक्षेषु के कूर्दन्ति?

- a) वानराः b) खगाः c) जनाः d) बालाः

च) के प्रसन्नः सन्ति?

- a) जनाः b) खगाः c) पक्षिणाः d) बालाः

छ) जनाः कुत्र भ्रमन्ति धावन्ति?

- a) वृक्षेषु b) उद्यानेषु c) वनेषु d) क्षेत्रेषु

ज) बालाः कुत्र क्रीडन्ति?

- a) उद्यानेषु b) मार्गेषु c) वनेषु d) क्षेत्रेषु

झ) पशवः प्रातः कीदृशाः सन्ति?

- a) खिन्नाः b) प्रसन्नाः c) दुःखिनः d) सुखिनः

ञ) के वनेषु अत्र-तत्र गच्छन्ति?

- a) वानराः b) खगाः c) पशवः d) बालाः

ट) सर्वे जनाः केषु संलग्नाः भविष्यन्ति?

- a) स्वधर्मेषु b) स्वकार्येषु c) स्वक्षेत्रेषु d) स्वकर्तव्येषु

ठ) लेखकः किम् करोति?

- a) लिखति b) खादति c) पठति d) वदति

ड) महिला किम् करोति?

- a) लिखति b) पचति c) पठति d) वदति



ढ) सैनिकः किम् करोति?

- a) देशं रक्षति b) भ्रमति c) पठति d) वदति

ण) अध्यापकः किम् करोति?



- a) लिखति b) खादति c) पठति d) पाठयति



2. कोष्ठकात् उचितं पदं चित्वा रिक्तस्थानानि पूरयत।

क)   _____ बालकः अस्ति। (एषः / एषा)

ख)   _____ माला अस्ति। (एषः / एषा)

ग)   _____ मयूरः अस्ति। (एषः / एषा)

घ)   _____ वृद्धा अस्ति। (एषः / एषा)

ङ)   _____ पाठशाला अस्ति। (एषः / एषा)

DAV PUBLIC SCHOOL, ECL, JHANJRA AREA

SESSION: 2024-25

CLASS: V SUBJECT: MATHEMATICS

HOLYDAY HOMEWORK

Choose the correct answer :

1. 1 Lakh =..... Million

- a) 1 b) 10 c) 100 d) 1000

2. The successor of 9,999 is

- a)10,000 b)1,00,000 c)10,00,000 d)1,00,00,000

3. The smallest 8-digit number is

- a)10000000 b)100000 c)10000 d)1000

4. State whether the statement is true or false:

The greatest 8- digit number is 9, 99, 99,999.....

- a) true b) false

5. Fill up the gap: The place value of 6 in the numeral 265,789,087 is

- a) 60,000,000 b) 6,000,000 c) 60,000 d) 600,000,000

6. The predecessor of the predecessor of 99,999 is

- a) 1, 00,000 b) 1, 00,001 c) 11, 00,000 d) 1, 00,002

7. The smallest 8-digit number using the digit 7,5,0,1,2,9,8 and 4 is

- a) 98754210 b) 9875420 c) 9875402 d) 98754021

8. 60 million= crores....

- a) 6 crores b) 60 crores c) 600 crores d) 10crores

9. $9999 \div 99 = \dots\dots\dots$

- a) 11 b) 101 c) 99 d) 110

10) Digit in the ones place of the product of 783 and 896 is

a) 9 b) 8 c) 6 d) 2

11. Tens digit in the sum of 13846, 62381 and 57402 is

a) 2 b) 3 c) 4 d) 5

12. $\dots \times 1 = 846$

a) 846 b) 684 c) 486 d) 864

13. $25000 \div 25 = \dots$

a) 10 b) 100 c) 1000 d) 10000

14. Which is the correct:

a) $4 \times 9 = 32$ b) $4 \times 9 = 36$ c) $4 \times 9 = 38$ d) $4 \times 9 = 40$

15. Eleven crore thirty six thousand sixteen is

a) 11,00,36,016 b) 11,36,016 c) 1,10,00,016 d) 11,00,016

16. Nine hundred million nine thousand nine is

a) 900,009,009 b) 90,009,009 c) 9,009,009 d) 900, 9,009

17. 1 lakh = Thousand

a) 10 b) 100 c) 1000 d) 10000

18. $4,182 \times 100 = \dots$

a) 418200 b) 412800 c) 4182000 d) 41820000

19. 1 less than 10,00,000 is ...

a) 9,99,999 b) 99,99,999 c) 9,99,99,999 d) 99,99,99,999

20. One more than 99, 99,999 is ...

a) 1, 00, 00,000 b) 10,00,00,00 c) 1, 00,000 d) 10,000

DAV PUBLIC SCHOOL, ECL, JHANJRA AREA

SESSION:2024-25

CLASS-V SUBJECT-SCIENCE HOLIDAY HOMEWORK

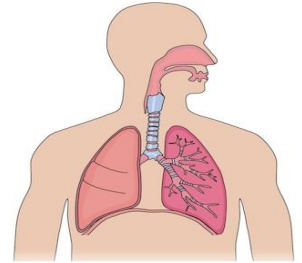
Choose the correct option.

1. Look at the diagram carefully.

The organs shown in the diagram work together for a specific function in our body.

That specific function is—

- (a) Running
- (b) Hearing.
- (c) Bone formation.
- (d) Breathing.



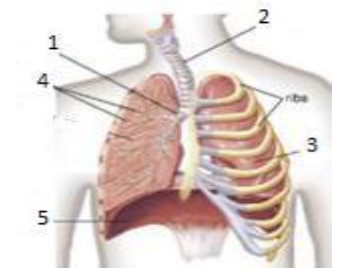
2. Sumit wants to make his breathing system healthy. For this purpose he should—

- (a) Watch TV regularly.
- (b) Become lazy.
- (c) Exercise regularly.
- (d) Wash his teeth twice a day.

3. Observe the given diagram carefully.

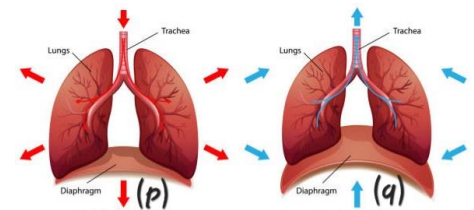
The part that is labelled with 5 is known as—

- (a) Lungs.
- (b) Wind pipe.
- (c) Diaphragm.
- (d) Oesophagus.



4. See the diagram and choose correct option.

- (a) Inhalation is shown by (p) and exhalation is shown by (q).
- (b) Inhalation is shown by (q) and exhalation is shown by (p).
- (c) Both (p) and (q) show inhalation.
- (d) Both (p) and (q) show exhalation.



5. Some important characteristics of bones are given below.

- (i) Bones are mainly made up of Calcium and Phosphorus.
- (ii) Bones are non- living entity.
- (iii) Number of bones in an adult human body are 206.

Among these three characteristics , correct ones are :

- (a) (i) and (iii)
- (b) (ii) and (iii)
- (c) (i) and (ii)
- (d) Only (ii).

6. Observe the given diagram.




This part of human body is made up of —

- (a) 33 flat bones.
 - (b) 8 flat bones.
 - (c) 35 flat bones.
 - (d) 2 flat bones.
7. Brain is one of the most delicate organ in human body. The part of skeletal system that protects Brain is —
- (a) Rib-cage.
 - (b) Skull.
 - (c) Backbone.
 - (d) Fore limbs.
8. The longest bone in human body is B and it is present in body part L.
- B and L are :
- (a) B: Femur and L : Hand.
 - (b) B: Stirrup and L : Shoulder.
 - (c) B: Femur and L : Thigh.
 - (d) B : Stirrup and L : Ear.
9. The smallest bone in human body is present inside ear. Name of the bone and its position is—
- (a) Stirrup, inner ear.
 - (b) Femur, middle ear.
 - (c) Stirrup, middle ear.
 - (d) Femur, inner ear.
10. Aranya has bought chocolates in her birthday for her classmates. Anamika eats one chocolate and it is very sweet. Taste buds that help to feel this taste are present —
- (a) On front part of tongue.
 - (b) On the backside of tongue.
 - (c) Middle of tongue.
 - (d) On the side of tongue.
11. Our backbone is not made up of one long straight bone, rather it is made up of 33 small bones and it provides us flexibility of backbone. These small bones are known as —
- (a) Bronchus.
 - (b) Ribs.
 - (c) Vertebrae.
 - (d) Bone-marrow.
12. We can move our head back and forth to say 'NO' to someone. Type of joint that helps us to do this is —
- (a) Hinge joint.

- (b) Ball and socket joint.
 - (c) Gliding joint.
 - (d) Pivot joint.
13. There are bones in our hand and they are connected by joint in elbow that helps us to move our hand along one plane. This type of joint is —
- (a) Hinge joint.
 - (b) Ball and socket joint.
 - (c) Gliding joint.
 - (d) Pivot joint.
14. Our bones are connected with muscles by a special type of tissue. These tissues are known as —
- (a) Ligament.
 - (b) Cartilage.
 - (c) Bone marrow.
 - (d) Vertebrae.
15. Long bones of our hands and legs are hollow inside. Inside that hollow space a liquid substance is present which is essential for making blood. The liquid substance is known as —
- (a) Cartilage.
 - (b) Ligament.
 - (c) Bone marrow.
 - (d) Vertebrae.
16. Ritak Sir took his students to botanical garden. One of his student Anita saw a butterfly sitting on a flower. When she observed carefully, she saw two long thread like structure near the mouth of butterfly. Ritak Sir told them that those are called feelers. Feelers help butterfly to —
- (a) Walk on flower.
 - (b) Smell and taste the food.
 - (c) Drink nector from flower.
 - (d) Control the body balance while sitting on flower.

17.



This is a diagram of a fish. A line labelled as **A** is present on the fish. Name of **A** and its function is —

- (a) Vertical line , helps to detect their prey and feel the wave.
- (b) Lateral line, helps to detect their prey and feel the wave.
- (c) Lateral line, helps to taste their food.
- (d) Vertical line, helps to breathe under water.

18. Sniffer dogs are often used by police for investigation. It is because of their —
- (a) Strong sense of vision.
 - (b) Strong sense of taste.
 - (c) Strong sense of hearing.
 - (d) Strong sense of smell.



19. A snake uses it's tongue —
- (a) to find food only.
 - (b) to feel vibrations on the earth.
 - (c) to sense the presence of enemy.
 - (d) to sense any danger.
20. Bats are active at night. They create high-pitched sound to detect their prey. We cannot hear these high-pitched sounds. These high-pitched sounds are called —
- (a) Infrasonics.
 - (b) Ultrasonics.
 - (c) Supersonics.
 - (d) Sonics.

D.A.V. PUBLIC SCHOOL, ECL, JHANJRA AREA

SESSION-2024-2025

CLASS- V SUBJECT-SOCIAL SCIENCE HOLIDAY HOMEWORK

1. Fill in the blank with appropriate word:

This type of family includes both parents and their married children. This is a _____ type of family.

2. State whether the statement is True or False :

Spending time together with family members helps to improve the family bond.

3. Correct the statement and rewrite:

The child learns everything by watching and imitating the neighbours.

4. Choose the correct option:

To motivate the young members to excel, family should _____ .

- | | |
|------------------------------|-----------------------------|
| A. bring many books for them | B. find out mistakes |
| C. scold them | D. encourage and appreciate |

5. Correct the statement and rewrite:

Sharing of household chores increases the burden.

6. Read the two statements carefully and choose the correct option:

Statement I: In earlier times, migration was carried out within a limited area.

Statement II: Earlier there were no means of transport and people were scared to travel to far- away places due to difficulties, myths and superstitions.

- A. Only Statement I is correct.
- B. Only Statement II is correct.
- C. Both statement I and Statement II are correct.
- D. Both statement I and Statement II are false.

7. Which among the following is NOT a reason for voluntary migration?

- A. Better job opportunities.
- B. Educational opportunities.
- C. To be close to the family or friends.
- D. Earthquake and tsunami.

8. Identify the picture:



- A. Migration of Caribou
- B. Migration of Siberian Crane
- C. Migration of Wildebeests
- D. Migration of Arctic Tern

9. With the given pictures identify and write down the type of migration:



10. Choose the correct option:

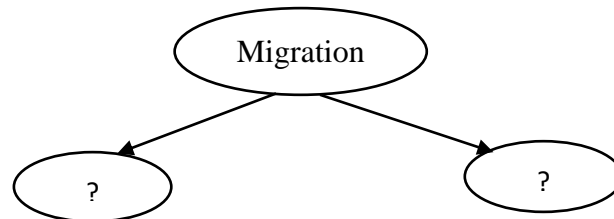
According to mythology _____ is the resting place of Gods.

- A. Ocean
- B. Desert
- C. Mountain
- D. River

11. Growing crops on a new piece of land once the fertility gets exhausted is-

- A. Seasonal agriculture
- B. Shifting agriculture
- C. Commercial agriculture
- D. Subsistence agriculture

12. Complete the web chart on types of migration.



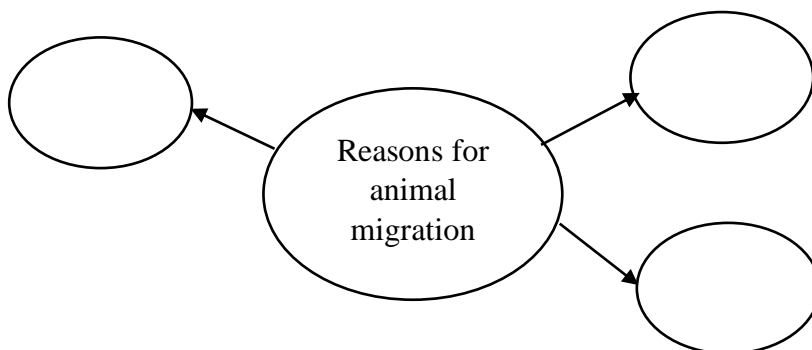
13. Identify the type of family with the help of the given picture:



14. State whether the statement is True or False:

Migration brings happiness to many people.

15. Complete the web chart:



16. Identify and write the type of migration from the given image:



17. Design a web chart to show the steps the family members can take to make strong bonds.

18. List any four causes of voluntary migration.

19. Compare voluntary migration with forced migration.

20. List any four qualities that you want to take from your role model.

DAV PUBLIC SCHOOL, ECL, JHANJRA AREA

SESSION:2024-25

SUB: ICT CLASS-V

HOLIDAY HOMEWORK

1. Choose the correct option.
 - i) Define permanent memory choose the correct option.
 - a.HDD
 - b.CD
 - c.FDD
 - d.Pendrive

 - ii) Choose the correct option it is fixed inside the CPU
 - a. HDD
 - b.CD
 - c. FDD
 - d. Pendrive

 - iii To transfer a file from one system to another we need____(Choose the correct option)
 - a. To store data
 - b.to transfer file
 - c.to delete a file
 - d. all of the above.

 - iv) Write the purpose of a storage device.
 - a. Single dot
 - b. double dot
 - c.1920 dots
 - d.1020 dots.

 - v)Define Pixel?
2. **Fill up the gap with the most appropriate answer:**
 - l) _____ is a volatile memory
 - a.RAM
 - b.ROM

- c.HDD
- d.BIOS

II) An _____ is an electronic data storage medium.

- a.Optical disc
- b.prn drive
- c.Memory Card
- d.HDD

III) ____ is a digital optical disc.

- a.Blue Ray
- b.CD
- c.DVD
- d.Flash Drive

IV) Computer can recognises only two digits_____ .

- a.0 and 1
- b.2and 3
- c.3 and 4
- d 5 and 6

V) A combination of _____ bits makes a nibble.

- a.4
- b.5
- c.5
- d.6

3. **State whether the statement is true or false.**

- I) ROM hold the system startup instructions.
- II) RAM is a non volatile memory
- III) Arithmetic logic unit performs all the calculations
- IV) The cards and keypad apps and input device in an ATM machine
- V) RAM is a short term memory

4. Match column A with column B

| A | B |
|-------------|------------------|
| i)Pen drive | secondary memory |
| ii)harddisk | flash drive |
| iii)RAM | non volatile |
| iv)ROM | compact disk |
| v) CD | volatile |

DAV PUBLIC SCHOOL, ECL, JHANJRA AREA

SESSION: 2024-25

SUBJECT: GK CLASS: V

HOLIDAY HOMEWORK

1. Choose the correct answer from the following options.

- i) Onion is a modified-
 - a. root
 - b. stem
 - c. leaf
 - d. water

- ii) A gun, fired from the moon cannot be heard at all because-
 - a. there is no life on the moon.
 - b. the moon has no air.
 - c. the sound of the gun is lost in the craters on the moon.
 - d. none of these.

- iii) The taps in your school are open and water is being wasted .You will ____
 - a. just ignore
 - b. inform the teacher
 - c. close them at once
 - d. forgot it

- iv) Some of your friends in your school decide not to attend class but hind in the canteen. You will ____
 - a. join friends
 - b. go to class
 - c. disagree and explain them the reason.
 - d. non of these

- v) Your friends are fighting during recess time. You will ____
 - a. call a teacher
 - b. not bother
 - c. try to stop the fight
 - d. non of these

- vi) This animal is the world symbol of conservation. It is decreasing in number because of loss of habitat.
 - a. Whale
 - b. Crocodile
 - c. Giant Panda
 - d. Lion

- vii) Which animal is killed for its expensive oil ?
 - a. Cow
 - b. Crocodile
 - c. Dolphin
 - d. Whale

viii) What was first ever manned space vehicle ?

- a. Columbia
- b. Beagle 2
- c. Vostok
- d. Vanguard1

2. One name in each set differs from other. Tick the odd one.

- i) Elephant, Shark, Whale, Dolphin
- ii) Gitanjali, Panchtantra, Jungle book, Banana

3) Fill up the gap with the most appropriate answer-

i) Rabindra Nath Tagore won The nobel prize for composing _____.

- a. Gitanjali
- b. Kavya
- c. Sahitya
- d. Ramayana

ii) _____ lives the longest.

- a. Turtle
- b. Dolphin
- c. Ostrich
- d. Whale

4) State whether the statement is true or false.

- i) The author of Jungle Book is Enid Blyton.
- ii) A sports arena with seats for spectators is called Stadium.
- iii) A place where bees are kept is called Sanctuary.
- iv) The meaning of the idiom 'Nine to five' is normal office hours.
- v) The atmosphere of moon is similar to that of the earth.
- vi) Liver is not a part of human digestive system.
- vii) Dodo and Moa are the birds which are not alive any more.
- viii) Jamun leaves are used in Ayurveda to cur digestive disorders.